

Year 3 Home Learning Activities – 29th June 2020

We would like your child to complete a range of activities over the week. Some activities can be completed independently, however some require support from adults.

Please email **at least one example of work per week** to hb3@woodstonprimary.org.uk so we can celebrate their home learning.

<p><u>Reading</u></p>	<p>Visual Literacy: Inference Activity</p>	<p>Listen to Your Child Read: This should to be 1:1, 4 times a week for approximately 10 minutes.</p> <p>This could be a book from home or an e-book. Book Trust Oxford Owl</p> <p>Adult support required.</p>	<p>Comprehension: 60 second read task. Children have 60 seconds (1 minute) to read the text provided. This is followed by a selection of questions. Children have as long as they need to answer the questions. (Answers Provided)</p> <p>Independent</p>
<p><u>English/ Theme</u></p>	<p><u>The Pebble in my Pocket - Slides</u> Attached to this email are the slides the children in school will be using this week. They give explanation and activities based around the book. You do not need to buy the book as all the resources, text and images are on the slides. These slides will also include theme based activities linked to the story. You can work through these slides at your own pace but all slides must be completed unless stated otherwise as this is a sequence of understanding. Some adult support may be required.</p>		
<p><u>Spelling/ Grammar</u></p>	<p>Assessments: - Pixl Grammar Test (Answers provided) Independent</p> <p>This activity may require adult support to address any errors after it has been completed.</p>	<p>Spelling: Choose 5 spellings from the Common Exception words or Statutory Spelling lists below. - Choose a spelling activity from the grid below. Independent</p> <p>- Practise and Test Adult support required.</p>	<p>Handwriting: Please use the spellings to now practise handwriting. Handwriting needs to be cursive looped.</p> <p>The link is a great website that has videos and activities. If you need more support there is also videos on pencil grip and sitting posture.</p> <p>https://www.teachhandwriting.co.uk/route-d-letter-choice-2-ks2.html Independent</p>

<p><u>Maths</u></p>	<p>Assessments: - Times Tables Revision <i>Some adult support may be required.</i></p> <p>Assertive Mentoring Maths 20minutes to complete - Answers provided <i>Independent</i></p>	<p><u>Angles and Lines Week</u> Attached to this email are the slides the children in school will be using this week. They give explanation, activities as well as reasoning questions. You can work through these slides at your own pace but all slides must be completed unless stated otherwise as this is a sequence of understanding.</p> <p><i>Some adult support may be required.</i></p>
----------------------------	--	---

Attached to this email:

- English/Theme Slides
- Maths Slides

Attached to this document:

- PIXL Grammar Assessment
- Spelling Activities Sheet
- Maths Assertive Mentoring and Answers
- Inference Challenge
- 60 Second Read Activities and Answers

Y3 Grammar and Punctuation Quiz 2

1. Add two **full stops** in the correct places below.

It was raining Sarah and Jack put on their coats

1 mark

2. Circle the **noun** in the sentence below.

Yesterday, the sun was shining.

1 mark

3. Circle **one** word in each set of brackets to complete the sentences correctly.

Today, I am (playing / played) with my friends.

Yesterday, I (playing / played) with my friends.

1 mark

4. Write one **adverb** to complete the sentence below.

She ate her sandwich _____.

1 mark

5. Insert an **apostrophe** in the correct place in the sentence below.

Johns party was fun.

1 mark

6. Which sentence is in the **present tense**?

Tick **one**

Sana went to the museum.

☐

Sana will go the museum next week.

☐

Sana is at the museum.

☐

Sana has been to the museum.

☐

1 mark

7. Insert a **comma** in in the correct place in the sentence below.

John Sana and Abbas went to the cinema.

1 mark

8. Draw a line to match each word to the **suffix** that turns it into a **noun**.



Word

build

Suffix

er

or

er

or

1 mark

Qu.	Quiz 2 Answers	Notes
1	It was raining. Sarah and Jack put on their coats.	
2	sun	
3	Today, I am <u>playing</u> with my friends. Yesterday, I <u>played</u> with my friends.	Also accept answers which have been underlined.
4	Any appropriate adverb. E.g. carefully, quickly, noisily, earlier	Answers must be spelt correctly and must not include capital letters.
5	John's party was fun.	Apostrophes must be curved to the left.
6	Sana is at the museum. (<i>Option 3</i>)	
7	John, Sana and Abbas went to the cinema.	Commas must be the correct size and must be curved to the left.
8	<div> <div>Word</div> <div>build</div> </div> <div> <div>Suffix</div> <div>er</div> </div> <div>or</div> <div> <div>Word</div> <div>play</div> </div> <div> <div>Suffix</div> <div>er</div> </div> <div>or</div>	

PIXL Grammar
Assessment
Answers

Spelling Activities

Acrostic Poem

Choose one of your spelling words.
Write an acrostic poem using that word.
Illustrate your poem.

Example: sun

S
U
N
Summer is here
Under the rays
New flowers grow



Blue Vowels

Write each of your spelling words.
Trace the vowels in your words with a
blue coloured pencil.

Vowels: a e i o u

a e i o u
i u a o e
a e i o u
a o i e u
u e i o a
o a i e u
a e i o u
i u a o e
a e i o u
a o i e u
u e i o a
o a i e u

Spelling Shapes

Count your spelling words. Draw one shape
for each word. Now write a spelling word in
each of the shapes.

Example:

when

four

nice

Upper and Lower

Write each of your spelling words two times.
First, write each word in upper case letters.
Then write each word in lower case letters.



Maths Assertive Mentoring Stage 3 Week 3

Maths Key Skills


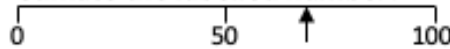




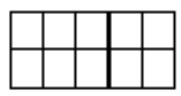

Stage 3: Skill Check 3

Name: _____

Date: _____

Class/Group: _____



A: Place Value, Add and Subtract		B: Multiply, Divide and Fractions		C: Measure and Geometry	
1. What is the missing number? 0 50 100 <input type="text"/> 200 250	3:1	11. $40 \div 8 =$	3:10	21. The cup holds 250 millilitres of liquid. The jug holds 1 litre of liquid. How many more millilitres does the jug hold?	3:19
2. What is the 7 worth in this number? 347	3:2	12. $9 \times 8 =$	3:10		
3. Write this number in words. 602	3:3	13. $18 \times 3 =$	3:11	22. Tom bought 3 cans of pop that were 75p each. How much did they cost in total? Give your answer in pounds and pence.	3:21
4. Estimate the labelled number? 	3:4	14. I buy 5 packs of balloons. I have 45 balloons. How many are in each pack?	3:12		
5. Write a number that is bigger than 793 using the same three digits.	3:5	16. Circle $\frac{1}{10}$ of the marbles. 	3:13	23. What time does this clock show? 	3:22
6. $302 - 10 =$	3:6	16. What fraction is shaded? 	3:14		
7. $752 - 93 =$	3:7	17. What is $\frac{1}{6}$ of 18?	3:15	24. How many right angles make a complete turn? 	3:27
8. Circle the best estimate to $98 + 131$ 220 230 240 250	3:8	18. This shape is in tenths. Shade in $\frac{1}{5}$. 	3:16		
9. Use $12 + 25 = 37$ to help solve: $370 - 120 =$ <input type="text"/>	3:9	19. Add the fractions. $\frac{2}{7} + \frac{3}{7}$	3:17	25. Circle the horizontal line. 	3:28
10. What is the missing number? $182 - \square = 124$	3:9	20. Write the smallest fraction. $\frac{1}{5}$ $\frac{1}{6}$ $\frac{1}{4}$ $\frac{1}{2}$	3:18		
Total (A)		Total (B)		Total (C)	
Test Total (A+B+C)		R (0-9)	Y (10-19)	G (20-25)	

Maths Assertive Mentoring Stage 3 Week 3 Answers



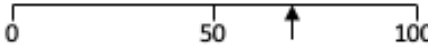



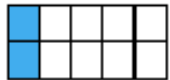

Maths Key Skills

Stage 3: Skill Check 3 Answers

Name: _____

Date: _____

Class/Group: _____

A: Place Value, Add and Subtract		B: Multiply, Divide and Fractions		C: Measure and Geometry	
1. What is the missing number? 0 50 100 <input type="text"/> 200 250	3:1 150	11. $40 \div 8 =$	3:10 5	23. The cup holds 250 millilitres of liquid. The jug holds 1 litre of liquid. How many more millilitres does the jug hold? 	3:19 750
2. What is the 7 worth in this number? 347	3:2 7 units	12. $9 \times 8 =$	3:10 72	22. Tom bought 3 cans of pop that were 75p each. How much did they cost in total? Give your answer in pounds and pence.	3:21 £2 and 25p
3. Write this number in words. 602	3:3 Six hundred and two	13. $18 \times 3 =$	3:11 54	23. What time does this clock show? 	3:22 5 (minutes) past 3
4. Estimate the labelled number? 	3:4 60-75	14. I buy 5 packs of balloons. I have 45 balloons. How many are in each pack?	3:12 9	24. How many right angles make a complete turn? 	3:27 4
5. Write a number that is bigger than 793 using the same three digits.	3:5 937 or 973	16. Circle $\frac{1}{10}$ of the marbles. 	3:13 1		
6. $302 - 10 =$	3:6 292	16. What fraction is shaded? 	3:14 $\frac{3}{12}$ or $\frac{1}{4}$		
7. $752 - 93 =$	3:7 659	17. What is $\frac{1}{6}$ of 18?	3:15 3		
8. Circle the best estimate to $98 + 131$ 220 230 240 250	3:8 230	18. This shape is in tenths. Shade in $\frac{1}{5}$. 	3:16 2 parts		
9. Use $12 + 25 = 37$ to help solve: $370 - 120 =$ <input type="text"/>	3:9 250	19. Add the fractions. $\frac{2}{7} + \frac{3}{7}$	3:17 $\frac{5}{7}$	25. Circle the horizontal line. 	Left line circled
10. What is the missing number? $182 - \square = 124$	3:9 58	20. Write the smallest fraction. $\frac{1}{5}$ $\frac{1}{6}$ $\frac{1}{4}$ $\frac{1}{2}$	3:18 $\frac{1}{6}$		
Total (A)		Total (B)		Total (C)	
Test Total (A+B+C)		R (0-9)	Y (10-19)	G (20-25)	

Inference Challenge



Literal Questions:

What did the person on the picture wear on their feet?

What weather is it like?

Inference Questions:

Name two countries that the person could be in.

Where did the person go?

What mode of transport did they use there?

What happened to the toe?

Cave Paintings

9 Deep within some ancient caves, the ceilings and walls
19 are covered in primitive art, brought to life by flickering
28 firelight. These paintings are not thought to have only
38 been for decoration, as they have been found in caves
43 with no signs of life.

52 Made by grinding colourful rocks (such as yellow ochre
63 and red oxide) into powder and binding them into a paste
72 using water or animal fat, early humans drew animals
81 and hunters, or left empty handprints, in caves around
92 the world, as a call for hunting success from their spirit
94 world ancestors.

103 Some famous cave paintings have been dated to around
114 18 000 years old but many are now closed to the public,
123 as the carbon dioxide breathed out by visitors caused
129 irreparable damage to the prehistoric relics.



Quick Questions



1. Find and copy two words from the text which mean the same as 'ancient'.



2. Name a rock from the text which can be ground to form a colourful powder.



3. Why is it not possible to risk the public damaging the cave paintings?



4. 'Deep within some ancient caves...'
In this sentence, what does the word 'some' tell the reader?

Cave Paintings

9 Deep within some ancient caves, the ceilings and walls
19 are covered in primitive art, brought to life by flickering
28 firelight. These paintings are not thought to have only
38 been for decoration, as they have been found in caves
43 with no signs of life.

52 Made by grinding colourful rocks (such as yellow ochre
63 and red oxide) into powder and binding them into a paste
72 using water or animal fat, early humans drew animals
81 and hunters, or left empty handprints, in caves around
92 the world, as a call for hunting success from their spirit
94 world ancestors.

103 Some famous cave paintings have been dated to around
114 18 000 years old but many are now closed to the public,
123 as the carbon dioxide breathed out by visitors caused
129 irreparable damage to the prehistoric relics.



Answers



1. Find and copy two words from the text which mean the same as 'ancient'.

Accept: primitive and prehistoric.



2. Name a rock from the text which can be ground to form a colourful powder.

Accept either 'yellow ochre' or 'red oxide'.



3. Why is it not possible to risk the public damaging the cave paintings?

Accept any answer pertaining to their historical value and their inability to be replaced.



4. 'Deep within some ancient caves...'
In this sentence, what does the word 'some' tell the reader?

Accept any answer which explains that the art is not present in all caves, only 'some' or a few.