

Home Education

Week beginning: 25.01.21

- Daily jobs – 4 little jobs to do each day.
- Different activities for each day, starting this week with Marvelous Monday. We are starting our new book this week, so we have lots of exciting learning to do as well as some maths and phonics.

Please add
observations/photos of
English and maths work
each day to Tapestry

This week's daily jobs!

Reading: please continue to read with your child daily. You could read any books that you have at home, magazines, comic books or anything else that you have access to. Oxford Owl have some free home learning reading activities: <https://www.oxfordowl.co.uk>

Cutting/scissor skills: Make a paper penguin. If you don't have colourful paper, you could use white paper and colour it in after: <https://www.youtube.com/watch?v=o6NXIRsSOGs>

Handwriting: please practise the long ladder letter family. You can watch this video to help you: <https://www.youtube.com/watch?v=CzKh3KmXSBs>

Exercise: Get outside and get some fresh air every day. Can you go for a walk, a bike ride, a scoot? Kick a football around in the garden?

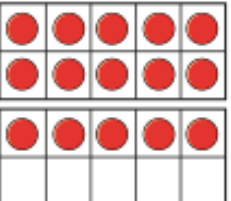
Marvellous Monday

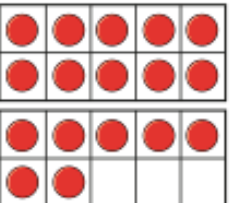
Maths

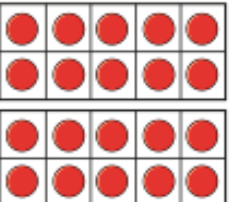
Subtraction – not crossing 10

White
Rose
Maths

1 Cross out counters to work out the subtractions.

a)  $15 - 4 = \square$

b)  $17 - 5 = \square$

c)  $\square = 20 - 3$



2 Teddy has these shapes.



He gives Eva 3 cones.

How many cones does Teddy have left?

3 Complete the subtractions.

a) $13 - 2 = \square$

c) $15 - 4 = \square$

b) $14 - 3 = \square$

d) $16 - 5 = \square$

What do you notice?

Use this to fill in the missing numbers.

$17 - \square = 11$

$19 - \square = 11$



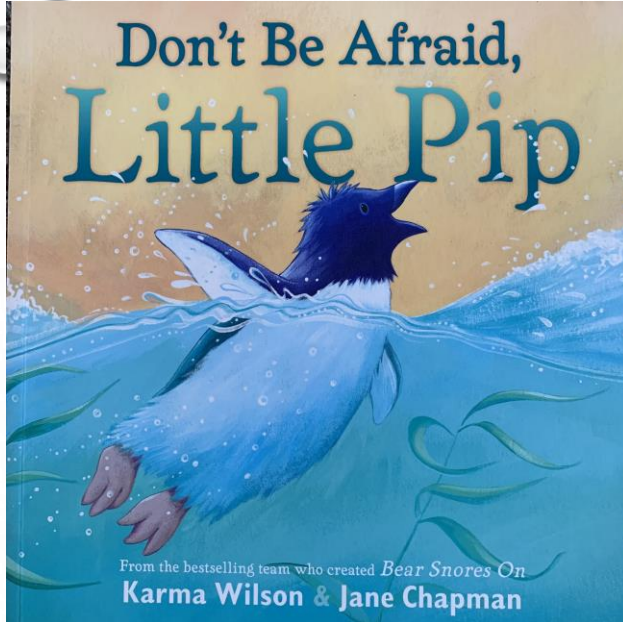
This week we are moving on to subtraction.

Watch this video and then complete the questions ☺

<https://vimeo.com/492197096>

Marvellous Monday


English



This is our new book! It is called 'Don't be Afraid Little Pip'.

We would like you to have a look at the front and back covers and then write a prediction about what the book might be about.

Please write full sentences and make sure that you include detail and say why you think that.



Marvellous Monday

Daily
sentence



Here is Plip!

What has she been up to today?

We can't wait to see your sentences!

It is very important that your sentence begins with a capital letter, has spaces between words and ends with a full stop.

Can you challenge yourself to use the tricky word 'was'?

Marvellous Monday

Phonics

ow

Watch the following video:

<https://www.youtube.com/watch?v=GJtvjxBYg7I>

How many words can you think of
that have the ow sound in it?

Make a crown and write ow words
on it!

ou

about
cloud
loud
sprout
shout

Read these 'ou' words. Can you
write a silly sentence with all of
these words in?

This week's daily jobs!

Reading: please continue to read with your child daily. You could read any books that you have at home, magazines, comic books or anything else that you have access to. Oxford Owl have some free home learning reading activities: <https://www.oxfordowl.co.uk>

Cutting/scissor skills: Make a paper penguin. If you don't have colourful paper, you could use white paper and colour it in after: <https://www.youtube.com/watch?v=o6NXIRsSOGs>

Handwriting: please practise the long ladder letter family. You can watch this video to help you: <https://www.youtube.com/watch?v=CzKh3KmXSBs>

Exercise: Get outside and get some fresh air every day. Can you go for a walk, a bike ride, a scoot? Kick a football around in the garden?

Tremendous Tuesday

Maths

Subtraction – not crossing 10 (counting back)


White
Rose
Maths

- 1 Ron uses a number track to work out $15 - 3$



$$15 - 3 = 12$$

Use the number track to help you work out the subtractions.

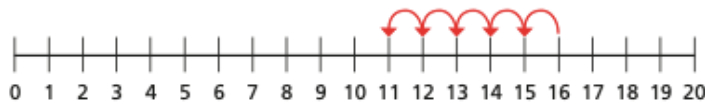


a) $14 - 3 =$ c) $14 - 4 =$

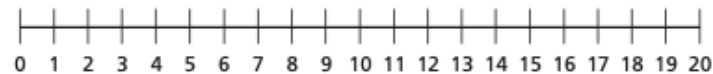
b) $15 - 4 =$

- 2 Use the number lines to help you.

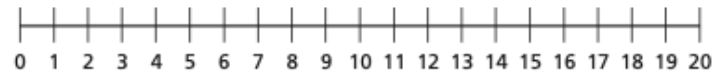
a) $16 - 5 =$



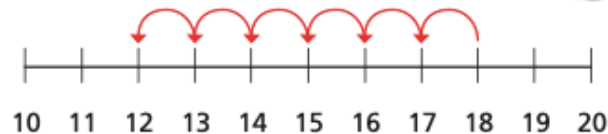
b) $18 - 4 =$



c) $19 - 5 =$



- 3 Sam uses a number line to work out a subtraction.



Complete Sam's subtraction. - =

Tremendous Tuesday

English



This is the first page of our new book.

How do you think Little Pip is feeling in this picture?

What clues make you think this?

Do you think that all of the other young penguins feel the same way?

What advice would you give to Little Pip?

Please have a discussion with an adult and write some sentences to answer some of these questions 😊

Tremendous Tuesday

Daily
sentence

Here is Plip!

What has she been up to today?

We can't wait to see your sentences!

It is very important that your sentence begins with a capital letter, has spaces between words and ends with a full stop.

Can you challenge yourself to use the tricky word 'little'?



Tremendous Tuesday

Phonics

oi

<https://www.youtube.com/watch?v=ORSfUQ5GTlg>

Read and write the 'oi' words and draw a picture to go with each one:

coin
point
boil
soil
toilet

oy

<https://www.youtube.com/watch?v=ORSfUQ5GTlg>

enjoy	gloy	loyal	denoy
floy	toy	enpoy	annoy
ahoy	zoy	royal	noy
aoy	oyster	proyp	destroy
boy	moyn	voyage	scoyl

Can you write a list of the real words and a list of the nonsense words?

This week's daily jobs!

Reading: please continue to read with your child daily. You could read any books that you have at home, magazines, comic books or anything else that you have access to. Oxford Owl have some free home learning reading activities: <https://www.oxfordowl.co.uk>

Cutting/scissor skills: Make a paper penguin. If you don't have colourful paper, you could use white paper and colour it in after: <https://www.youtube.com/watch?v=o6NXIRsSOGs>

Handwriting: please practise the long ladder letter family. You can watch this video to help you: <https://www.youtube.com/watch?v=CzKh3KmXSBs>

Exercise: Get outside and get some fresh air every day. Can you go for a walk, a bike ride, a scoot? Kick a football around in the garden?

Wonderful Wednesday

Maths

Subtraction – crossing 10 (1)



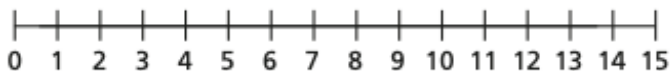
- 1 Rosie has 15 cakes.



Her friends eat 6 cakes.
How many cakes does Rosie have left?

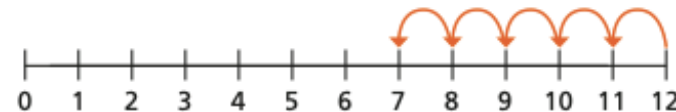


- 2 Jack has 13 stickers.
He gives 7 stickers to Dora.
How many stickers does Jack have left?



- 3 Ron and Eva have worked out $12 - 5$ on a number line.

Ron's method



Eva's method



- a) What is the same and what is different?
b) Use Eva's method to work out the subtractions.

$$12 - 6$$

$$15 - 8$$

$$14 - 9$$

- 4 Fill in the missing numbers.

$$14 - \square = 8$$

$$\square - 6 = 7$$

We will now be
subtracting by crossing
over the 10:

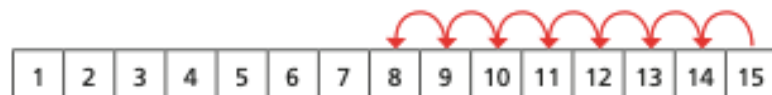
<https://vimeo.com/497919464>

Subtraction – crossing 10 (counting back)

- 1 There are 15 cookies in a jar.

Mo eats 7 cookies.

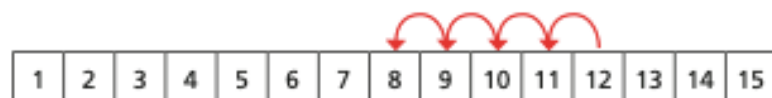
He counts back 7 from 15



How many cookies does Mo have left?

- 2 Use the number tracks to help you.


a) $12 - 4 =$



b) $12 - 5 =$

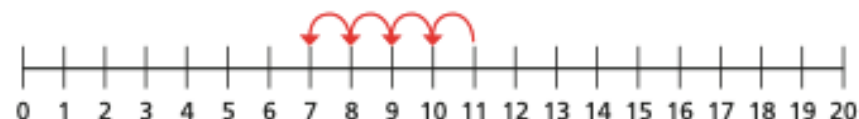


c) $12 - 7 =$



- 3 Use the number lines to help you.

a) $11 - 4 =$



b) $16 - 9 =$



c) $14 - 11 =$



- 4 There are 13 toys in a box.

Kim takes some toys out of the box.


There are 5 toys left in the box.

How many toys does Kim take out of the box?

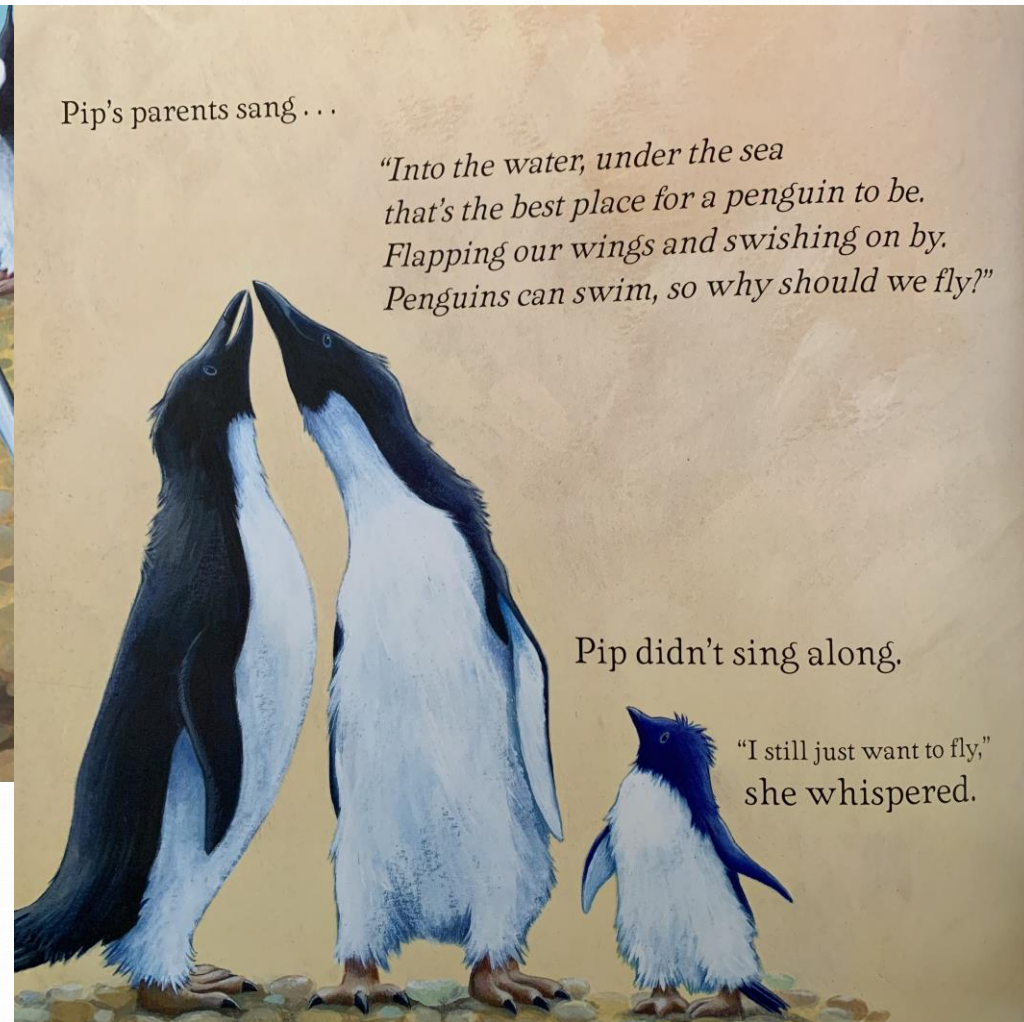


Wonderful Wednesday

English



Poor Pip is not feeling very happy at all. Can you pretend to be Pip and write a letter to our class penguin Plip telling her how you are feeling?



Wonderful Wednesday

Daily
sentence



Here is Plip!
What has she been up to today?

We can't wait to see your sentences!

It is very important that your sentence begins
with a capital letter, has spaces between
words and ends with a full stop.

Can you challenge yourself to use the
conjunctions 'so' and 'but'?

Wonderful Wednesday

Phonics

ear

<https://www.youtube.com/watch?v=dHe3Ripnt08>

Draw and cut out a picture of an ear.

How many 'ear' words can you think of or find in your books?

Can you write them on the ear?

To Kate,

Let me tell you how to make a cake that I have made.

First, you grate a lemon. Then, you add dates to make the base. Next, bake it. Then, take it out but stay away from the flame! I made a glaze to go on top. You can make it if you wish. I put choc flakes on top of the glaze.

This cake will amaze you! It is a top-grade cake. I made it for James and we ate it at the lake.

I must go now or I will be late!

From,

Jake xxx



Can you find and write all of the words with the a_e split digraph?

How many are there?

This week's daily jobs!

Reading: please continue to read with your child daily. You could read any books that you have at home, magazines, comic books or anything else that you have access to. Oxford Owl have some free home learning reading activities: <https://www.oxfordowl.co.uk>

Cutting/scissor skills: Make a paper penguin. If you don't have colourful paper, you could use white paper and colour it in after: <https://www.youtube.com/watch?v=o6NXIRsSOGs>

Handwriting: please practise the long ladder letter family. You can watch this video to help you: <https://www.youtube.com/watch?v=CzKh3KmXSBs>

Exercise: Get outside and get some fresh air every day. Can you go for a walk, a bike ride, a scoot? Kick a football around in the garden?

Thrilling Thursday

Maths

Now that you have practised subtraction by crossing out and counting back, you can choose which method you prefer to answer the following word problems:

Plip caught 16 fish. Pip ate 7 of them. How many fish are left for Plip?

There were 19 penguin eggs. 11 hatched. How many eggs haven't hatched?

Plip had 14 baby feathers. 8 fell off. How many baby feathers does she have left?

17 penguins are standing on the ice. 10 jump into the water. How many penguins are left on the ice?

Now can you make up some of your own subtraction word problems and see if a grown up can answer them?

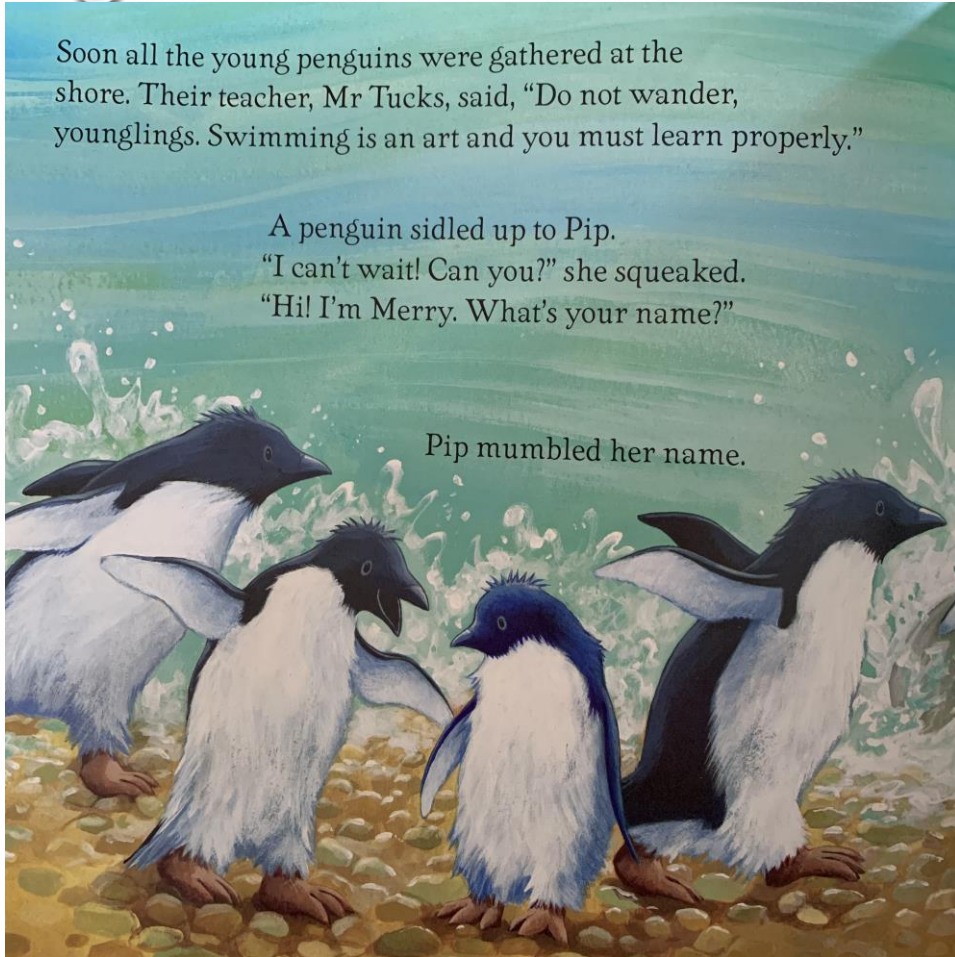
Thrilling Thursday

English

Soon all the young penguins were gathered at the shore. Their teacher, Mr Tucks, said, "Do not wander, younglings. Swimming is an art and you must learn properly."

A penguin sidled up to Pip.
"I can't wait! Can you?" she squeaked.
"Hi! I'm Merry. What's your name?"

Pip mumbled her name.



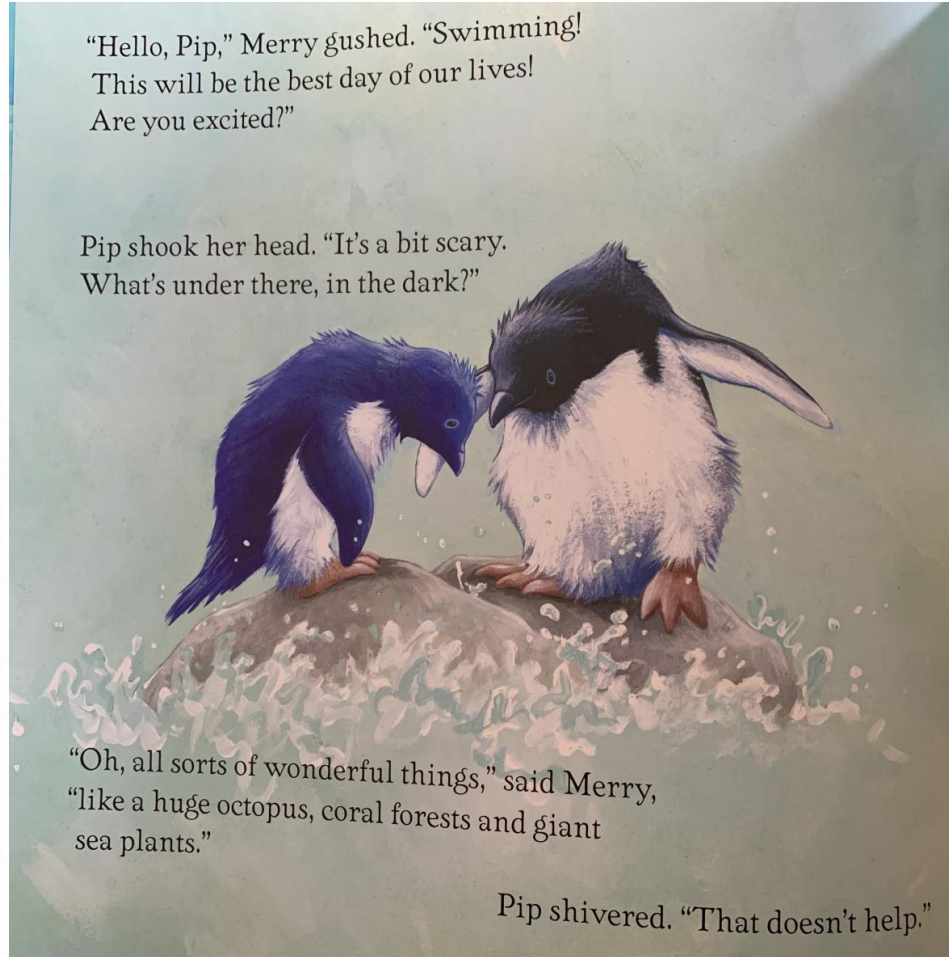
"Hello, Pip," Merry gushed. "Swimming!
This will be the best day of our lives!
Are you excited?"

Pip shook her head. "It's a bit scary.
What's under there, in the dark?"



"Oh, all sorts of wonderful things," said Merry,
"like a huge octopus, coral forests and giant
sea plants."

Pip shivered. "That doesn't help."



Pip is feeling more
and more frightened
about learning to
swim.

Can you think of a
time when you felt
frightened? What
were you frightened
of? Who or what
made you feel
better?

You could write it
down or make a
video to send to us
on Tapestry.

Thrilling Thursday

Daily
sentence



Here is Plip!

What has she been up to today?

We can't wait to see your sentences!

It is very important that your sentence begins with a capital letter, has spaces between words and ends with a full stop.

Can you challenge yourself to use the conjunctions 'and' and 'because'?

Thrilling Thursday

Phonics

air

<https://www.youtube.com/watch?v=T3rWZYN5jno>

fair zair
mair hair
plairb chair

Can you sort these into real and nonsense words?

How many more nonsense words can you write?

Can you read these yes/no questions and answer them with a thumbs up or thumbs down?

Could you carry an elephant on your head?

Have you ever seen a live crocodile?

Is December a summer month?

Has a space-ship ever been to the moon?

Could you make up a story about a ghost?

Could a cactus grow in Antarctica?

This week's daily jobs!

Reading: please continue to read with your child daily. You could read any books that you have at home, magazines, comic books or anything else that you have access to. Oxford Owl have some free home learning reading activities: <https://www.oxfordowl.co.uk>

Cutting/scissor skills: Make a paper penguin. If you don't have colourful paper, you could use white paper and colour it in after: <https://www.youtube.com/watch?v=o6NXIRsSOGs>

Handwriting: please practise the long ladder letter family. You can watch this video to help you: <https://www.youtube.com/watch?v=CzKh3KmXSBs>

Exercise: Get outside and get some fresh air every day. Can you go for a walk, a bike ride, a scoot? Kick a football around in the garden?

Fabulous Friday

Maths

Subtraction – Crossing 10 (2)



Chen



Jian



Lin



Here are clues about the children's ages:

Lin is 14 years old.

Jian's age is 5 years less than Lin's.

The difference between the oldest
and youngest is 7 years.

How old are Jian and Chen? Use cubes to make
towers that show their ages.

Choose a number from 10 to 20 and find the
difference between that number and your age.
Do this 5 times.

Fabulous Friday

"Hello, Pip," Merry gushed. "Swimming!
This will be the best day of our lives!
Are you excited?"

Pip shook her head. "It's a bit scary.
What's under there, in the dark?"



"Oh, all sorts of wonderful things," said Merry,
"like a huge octopus, coral forests and giant
sea plants."

Pip shivered. "That doesn't help."

Merry said there are lots of wonderful things in
the ocean. There is an octopus, some coral
forests and giant sea plants.

I wonder what else Pip will see under the sea!

Please draw or collage an under water picture
with all of the plants and animals that you
think will be under there.

Can you then add labels to your picture?

Fabulous Friday

Daily
sentence



Here is Plip!

What has she been up to today?

We can't wait to see your sentences!

It is very important that your sentence begins with a capital letter, has spaces between words and ends with a full stop.

Can you challenge yourself to use the conjunctions 'and' and 'because'?

Fabulous Friday

Phonics

Tricky words

Phase 4 Tricky Words

said	have	like	so	do
some	come	little	one	were
out	what	when	there	

These are the phase 4 tricky words. Write them all on pieces of paper, cut them out and turn them upside down. Then pick one up at a time and read the word as quickly as you can.

Challenge: can you spell them without looking?

Year 1 Common Exception Words

the
a
do
to
today
of
said
says
are
were
was

is
his
has
I
you
your
they
be
he
me
she

no
go
so
by
my
here
there
where
love
come
some

one
once
ask
friend
school
put
push
pull
full
house
our



www.twinkl.co.uk

Across the week please help your child to read and spell the Year 1 Common Exception words and tricky words (which can be found on the next slide)

Phase 2 to 5 Tricky Words

Phase 2	Phase 3	Phase 4	Phase 5
I no the to go into	he she we me be you are her was all they my	said have like so do some come little one were there what when out	oh Mrs people their called Mr looked asked could

a b c d e f

g h i j k l

m n o p q

r s t u v w


x y z

Cursive handwriting

Please keep practising your letter formation. You could use the handwriting PowerPoint to help you.

You will find it on the school Website in the Year 1 Home Education section

[Year 1 - Woodston Primary School](#)



Please use the free phonics games on the phonics play website. Your child will be familiar with these as they are a regular feature in our classroom teaching! Try the different phases to give yourself a challenge.

<https://www.phonicsplay.co.uk/resources>

Have fun!





Well done everyone!

What a lot of learning you have done this week! Thank you too to the grown ups or brothers and sisters who have helped you. We have loved seeing your learning on Tapestry!

Have a lovely weekend and watch out for next week's home learning. Who will be reading you stories and what will your teachers be telling you?!

